

- Connaître la décomposition additive du nombre 10.

Nom :

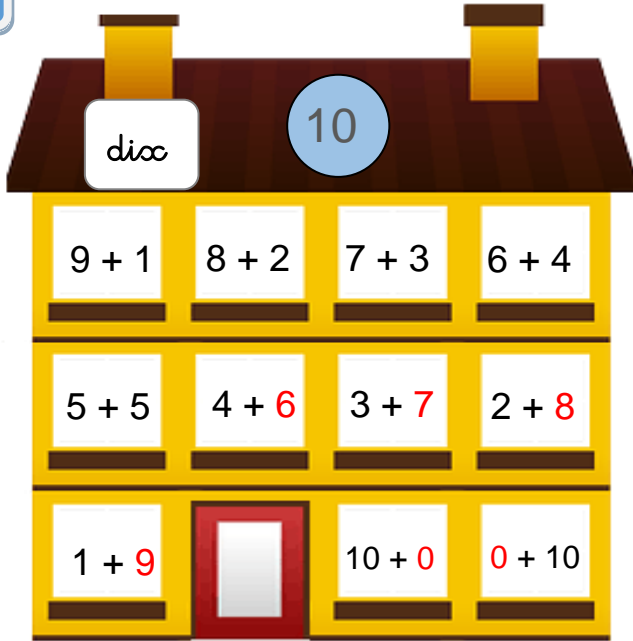
Date :

Corrigé

Décomposer le nombre 10

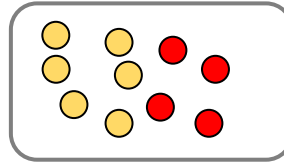
1

Complète les étiquettes.

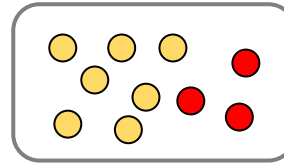


2

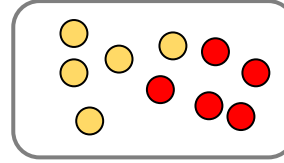
Complète pour faire 10



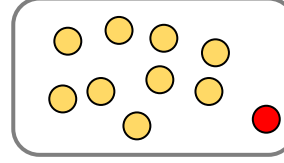
$6 + 4 = 10$



$7 + 3 = 10$



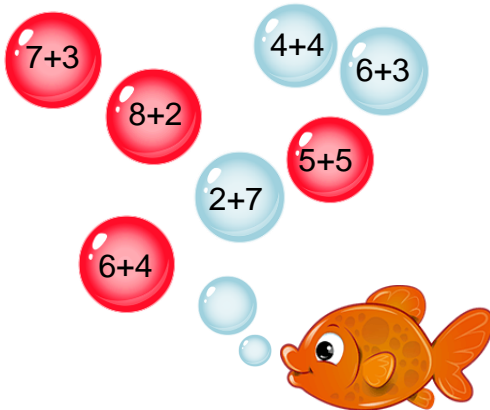
$5 + 5 = 10$



$9 + 1 = 10$

3

Colorie les bulles qui font dix.



4

Complète les additions.

$6 + 4 = 10$

$3 + 7 = 10$

$4 + 6 = 10$

$8 + 2 = 10$

$9 + 1 = 10$

$10 + 0 = 10$

$2 + 8 = 10$

$5 + 5 = 10$

$4 + 6 = 10$

$1 + 9 = 10$

5

Ecris les nombres en chiffres.

| | | | | | | | | | |
|----|------|-------|--------|------|-----|------|------|------|-----|
| un | deux | trois | quatre | cinq | six | sept | huit | neuf | dix |
| 1 | 2 | 3 | 4 | 5 | 6 | 7 | 8 | 9 | 10 |